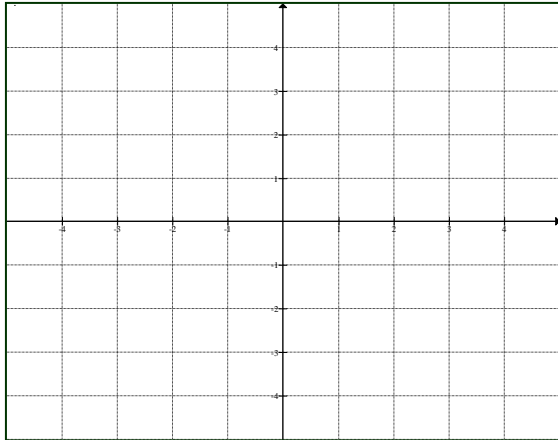


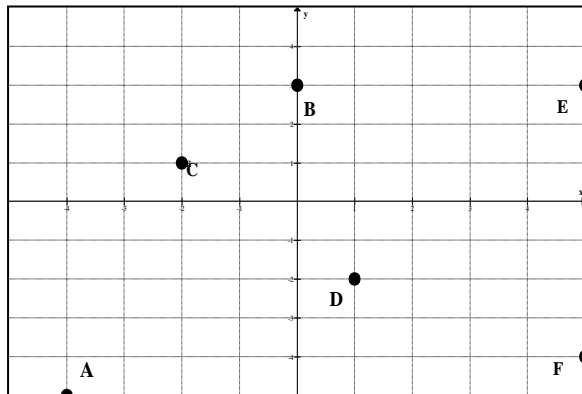
Cartesian Plane

Classwork

1. Label the quadrants, the origin, and the x-axis and y-axis.



2. In what quadrant or axis is each point located?



A ____

D ____

B ____

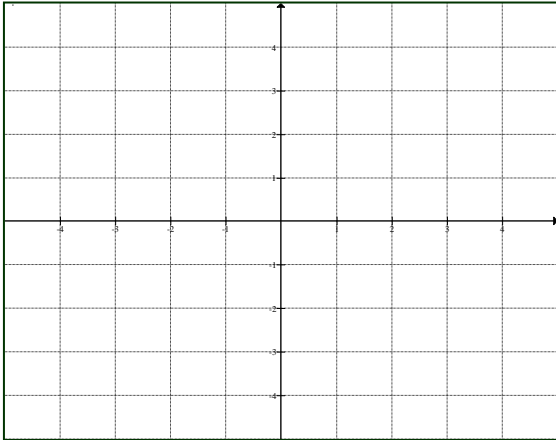
E ____

C ____

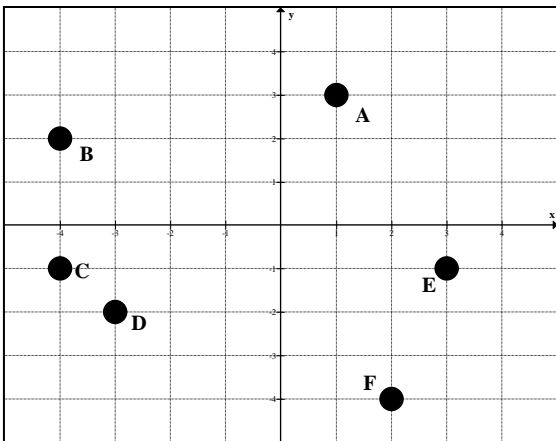
F ____

Homework

3. Label the quadrants, the origin, and the x-axis and y-axis.



4. In what quadrant is each point located?



A ____

D ____

B ____

E ____

C ____

F ____