

Garfield's Neighborhood Coordinate Plane Project

(Images from <https://garfield.com/characters?page=1>)

Group # _____

CEO: _____ CFO: _____ HR: _____



Score: Test Grade





Objective: Create a map of an imaginary version of Garfield's world.

Procedure: **Part 1:** Follow the instructions on this page to **create an individual rough draft** of your map. Once an individual rough draft is constructed, **compare maps** with your group mates. Lastly, as a group, **transfer the map** to a large poster.

Part 1: Map

Follow the steps below to create the map:

Character	Instructions	Points
Set-up your Cartesian Plane	<ol style="list-style-type: none"> Identify and label the origin, x-axis, and y-axis. Place your origin approximately in the center of your map. <ol style="list-style-type: none"> Label the x-axis "X Avenue" Label the y-axis "Y Street" Identify and label the four quadrants (write these in the upper corners of the quadrants). Identify and label the positive and negative sides of the axes (label at the endpoints of the axes). The map is a compass that is N, S, E, & W. Label it. Each unit is 1/12 mile. Indicate this with a legend. 	
	<p>Jon Arbuckle's house</p> <ol style="list-style-type: none"> Jon's house is around the origin. Plot the following ordered pairs to create a polygon: <ol style="list-style-type: none"> A (1,1) B (-1, 1) C (-1,-1) D (1,-1) Connect the vertices of the polygon to create a square. Add a roof to the house by adding point E (0, 3). Connect EB. Connect EA. 	
	<p>Dr. Liz Wilson's Veterinarian Office</p> <ol style="list-style-type: none"> The office is located in Quadrant III. Plot point G (-9,-8) and point I (-4,-6) The height of the building is two units, and the length of the building is 5 units. Plot the two remaining points and connect the vertices to create a rectangle. <ol style="list-style-type: none"> Point F (____,____) Point H (____,____) The perimeter of the office = _____ units. Convert this into miles using your legend. The perimeter is _____ miles. 	

	<p>Garfield</p> <ol style="list-style-type: none"> Garfield is hanging out at the local Italian restaurant. In order to draw the restaurant, you must: <ol style="list-style-type: none"> Plot the reflection over the <i>y-axis</i> of each vertex needed for the veterinarian's office. Label the new points appropriately. Connect the vertices to create a rectangle. Garfield is 7 blocks south and 7 blocks east from the Origin. <ol style="list-style-type: none"> Plot and label Garfield inside the restaurant. 	
	<p>Pooky</p> <ol style="list-style-type: none"> Pooky gets lost on the way to the Italian Restaurant! Pooky was last seen on X Avenue Pooky is 7 units away from Garfield's location. Label Pooky's location. 	
	<p>Odie</p> <ol style="list-style-type: none"> Odie is off running in the local Dog Park. Create the Dog Park by: <ol style="list-style-type: none"> Reflecting each vertex of the veterinarian's office over the <i>y-axis and the x-axis</i>. Label the ordered pairs of the new points. Connect the vertices to create a rectangle. Odie is 7 units from poor, lost Pooky. <ol style="list-style-type: none"> Plot and label Odie inside the Dog Park. 	
	<p>Nermal</p> <ol style="list-style-type: none"> Nermal is getting his beauty rest inside his cozy home. Nermal's house starts at point J (-6, 7). Plot the following three points. <ol style="list-style-type: none"> Point K is two units to the left of point J. Point M is two units up from point J. <i>Determine where point L must be if the house is a square.</i> Connect the vertices to create a polygon. The coordinates for the ordered pairs are: <ol style="list-style-type: none"> Point J (-6, 7) Point K (____, ____) Point L (____, ____) Point M (____, ____) Add a roof that is a triangle that is two units high from the middle of the main building. Where is this vertex? Point N (____, ____) Connect NL. Connect NM. 	



Mom Arbuckle's house

- 1) Mom Arbuckle's house is in the same quadrant as Nermal's house.
- 2) **Point S is the vertex of the roof.** The vertex is 6 units south, and 2 units east from the vertex of Nermal's rooftop. **Plot** Point S (____,____)
- 3) The vertex of the roof is centered to the rest of the house.
The *roof* is **two units in height**. The **base of the roof is six units in length**. The *main building* is **two units in height**.
 - a. **Complete** the missing coordinates.
 - b. **Connect** the points to *create a house with a triangular roof*.
 - a. Point O (____,____)
 - b. Point P (____,____)
 - c. Point Q (____,____)
 - d. Point R (____,____)
 - e. What is the **area** of the entire house on the map (including building and roof)? Area = _____ square units and _____ square miles.